

# TERM 1 EXAMINATION


Time: 2hrs

MATHEMATICS CLASS I

Marks: 40


1. Tick the dog nearest to the child .

1



2. Tick the smallest book

1

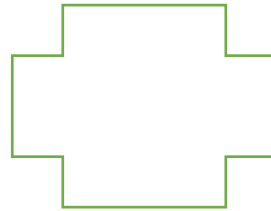
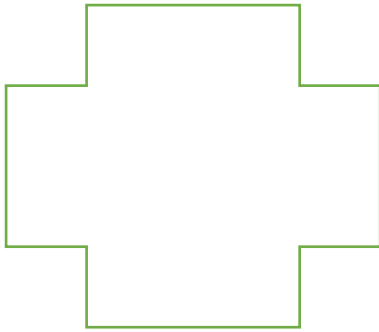


3. Write 'rolls' under the objects which rolls and 'slides' under the objects which slides 2



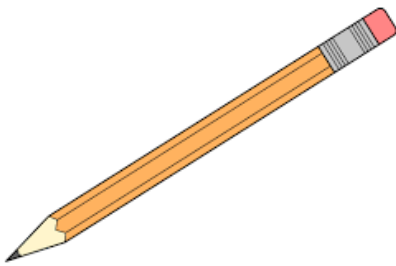
4. Colour the bigger figure

1



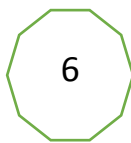
5. Tick the longer pencil

1




6. What comes before and after 6?

2




7. What are next numbers?

2



8. Count and write

1



9. Add and write

3

$$5 + 3 = \square$$

$$4 + 2 = \square$$

$$6 + 0 = \square$$

10. Write the missing numerals

1

$$\square + \square = 9$$

11. Add and match

2

$$2 + 6 \quad 5$$

$$4 + 1 \quad 7$$

$$5 + 2 \quad 9$$

$$6 + 3 \quad 8$$

12. Count and add

2



.....


+

.....


= .....

13. Subtract and write the answer

2



-



-

=

14. Subtract the following

3

$8 - 3 =$

=

$9 - 4 =$

=

$7 - 5 =$

=

15. Write the missing numbers

3

11	12	.....	.....	15
.....	.....	18	.....	.....

16. Find the biggest number

1

8    12    4    19

17. Find the smallest number

1

15    7    12    9

18. Find the following

3

$$12 + 7 = \dots\dots$$

$$16 - 5 = \dots\dots$$

$$17 - 0 = \dots\dots$$

19. Sam has 8 sweets with him. His brother gave him 7 more sweets. How many sweets was left with him?

2

20. Encircle the heavier ball

1



21. Tick the taller tree

1



22. **Measure and find out.**

4

- a) My water bottle ..... is span long.
- b) My book is .....pencil long.
- c) My school bag is ..... span long.
- d) My classroom is .....feet long.